










# Worksheets

## Worksheet 1

1. The owner of a shoe shop ordered boots for winter. They were of different sizes. Look at the table and answer the questions that follow. (1  = 10 pairs of boots)

BOOT SIZE 3		
BOOT SIZE 4		
BOOT SIZE 5		
BOOT SIZE 6		
BOOT SIZE 7		

- The least number of boots ordered is of size .....
  - The maximum number of boots ordered is of size .....
  - Size ..... and ..... have the same number of boots ordered.
  - The total number of boots ordered was .....
2. It was Diwali time and the children of Vijaya Vidyalay were organising a fancy diya sale. They wanted to give the profits of the sale to an orphanage. The sale made by each class is shown in the table. (Each picture represents 20 diyas. The cost of 100 diyas is 500 rupees.)

CLASS 2A		
CLASS 2B		
CLASS 2C		


- The maximum number of diyas were sold by Class .....
- The total number of diyas sold was .....
- The total sale was ..... rupees.

## Worksheet 2

1. You are going for an exam. Make a list of 5 items that you would need to carry.
- .....
  - .....
  - .....
  - .....
  - .....

2. You are going for a swim. Make a list of 5 items that you would need to carry.
- a. ....
- b. ....
- c. ....
- d. ....
- e. ....

3. Count the number of each kind of insect and write the number in the given space.



BUTTERFLIES ..... ANTS ..... LADY BIRDS .....

Which insect is in the largest number? .....

4. Margaret owned a children's boutique. She had ordered dresses of the same pattern in different colours. Colour the dresses according to the colours given. Look at the table and answer the questions that follow. (1 dress represents 5 dresses)

Pink		
Blue		
Yellow		
Green		

- a. Which colour do you think little girls are most fond of? .....
- b. Of which colour, did she order the least number of frocks? .....
- c. How many more blue frocks did she order than yellow frocks? .....
- d. What was the total number of frocks ordered? .....

## Answers to Worksheet 1

1. a. 5                      b. 3                      c. 6; 7                      d. 340 pairs of boots
2. a. 2A                      b. 200                      c. 1000 rupees

## Answers to Worksheet 2

3. 10; 9; 14; lady birds were in the largest number
4. a. Pink                      b. Green                      c. 10 frocks                      d. 120 frocks